


- 1** Put these weights in order.
Begin with the smallest.

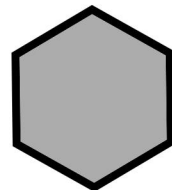
52g	71g	33g	18g	28g	22g
<input type="text"/>	<input type="text"/>	<input type="text"/>	<input type="text"/>	<input type="text"/>	<input type="text"/>

- 2** Match these shapes to their names.


Hexagon



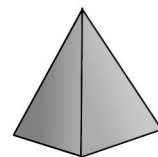
Pentagon



Pyramid



Octagon



- 3** Tanya has 16 toys. She gives half of them to her friend.
How many does she have left?

toys

- 4** Match the digital and analogue times.

2:30

Half past 11

9:30

Half past 2

6:00

8 o'clock

11:30

½ past 9

8:00

6 o'clock

5 What is the total amount of water in the buckets?


2 litres



6 litres




8 litres



litres

6 Colour two quarters of this shape.




7 Write out the days of the week in order starting with Monday.

Monday → → →

→ → →

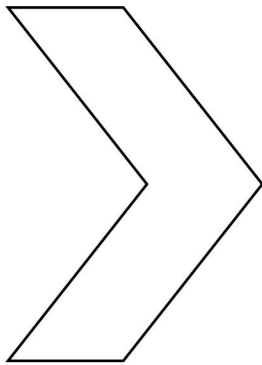
→

8 Find one quarter of these rockets.

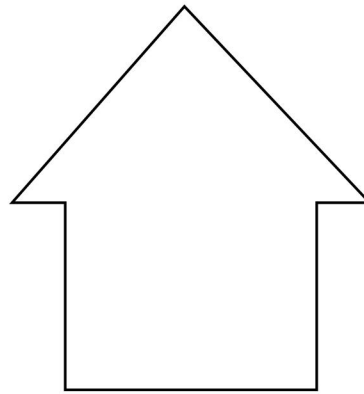


_____ Rockets

9 Write how many sides.



Sides



Sides

10 Some of the numbers in this 100 square are missing. Write them in.

	34		36		
43		45			
				57	
	64				
			76		