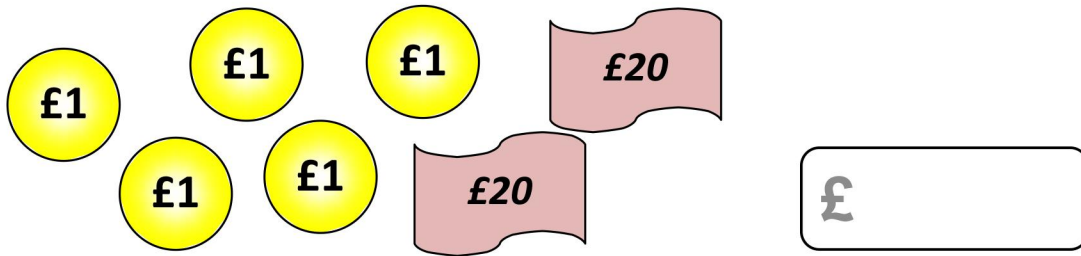
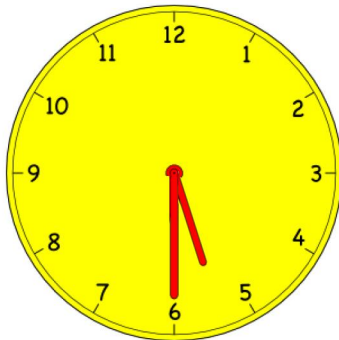


- 1** You have five £1 coins and two £20 notes  
How is this written in figures?




- 2** Sally went into the shop after her dinner at  
the time shown on the clock. What time is it?



She shopped for 20 minutes.  
What time did she leave?

**3** What fraction of these teddy bears are NOT circled?



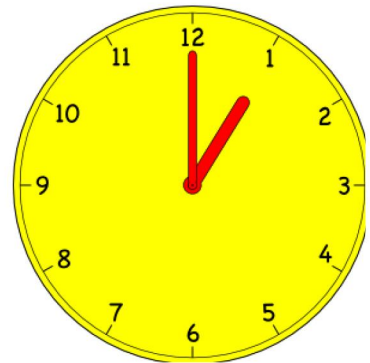
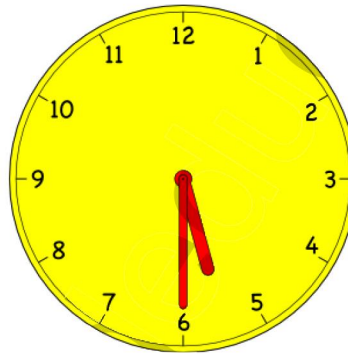
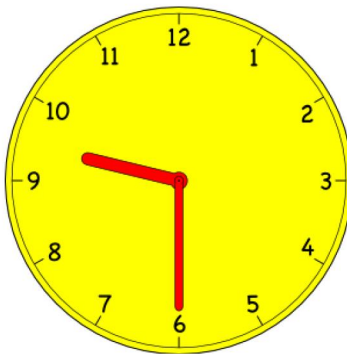
**4** Complete this multiplication grid.

X	2	4	5	10
2				
6				
3				


- 5** Draw two lines of symmetry on each shape.




- 6** Write the times shown on the clocks in figures.



**7** How many jugs of water will fill the pot?



$\frac{1}{2}$  litre



6 litres

Jugs

**8** Complete this division chart.

÷	24	16	12	36	32	40
4		4				10
2	12				16	

**9** Solve these subtraction problems.

$$\begin{array}{r} 954 \\ - 328 \\ \hline \end{array} \quad \begin{array}{r} 784 \\ - 529 \\ \hline \end{array}$$

**10** Tick the right angle.

