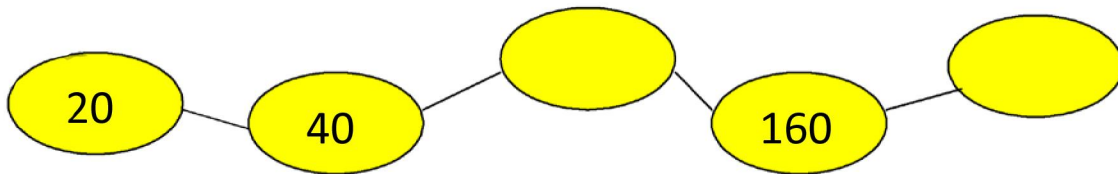



1 Complete the sequence.

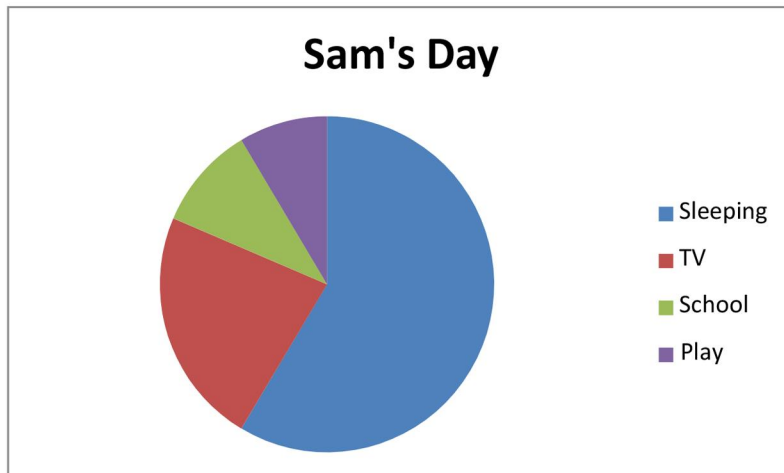


2 David has £2.94. He wants to buy a cricket bat which costs £3.55. How much more money does he need? Show your working.



£

3 How did Sam spend most of her day?



4 Round these distances to the nearest 100 miles.

770 Miles



245 Miles




430 Miles



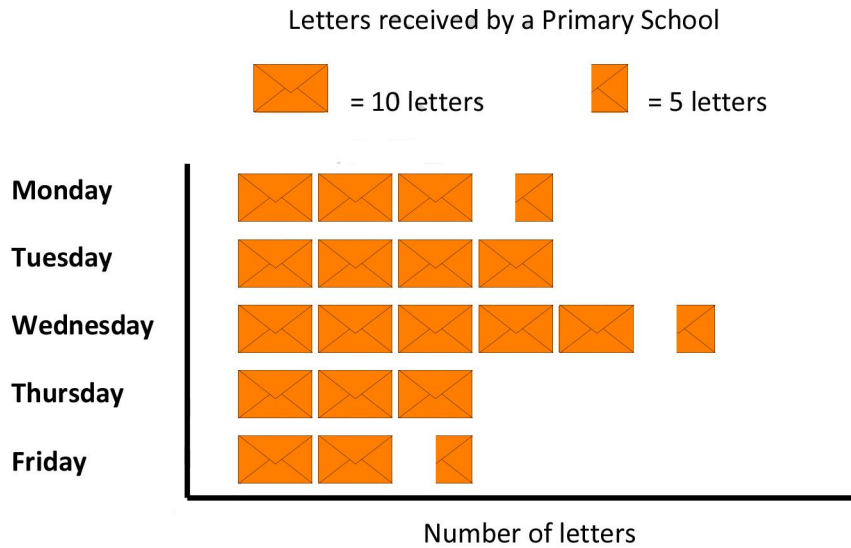
590 Miles



5 What fraction of this shape is shaded?



6 Answer the questions about the pictogram.



a) On which day does the school get the least number of letters?

Day

Number of Letters

b) On which day does the school get the most letters?

Day

Number of Letters

c) How many letters in total did the school get that week?

Letters

- 7** Write the missing numbers going in and coming out of the number machine.



IN	1	5	6		9		10
OUT	7			14		42	

- 8** Write these temperatures in order from hottest to coldest.



17°C

-8°C

-15°C

22°C

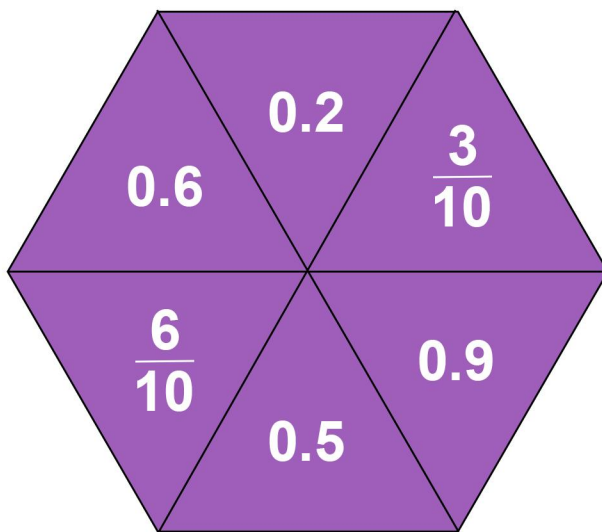
3°C

11°C

Hottest


Coldest

- 9 Which 3 scores on the spinner add up to 1 whole one?



- 10 What is the total cost of one burger and one portion of chips?

£2.65



£1.45



£