

1 Fill in the missing numbers in the chart.

x	60	79	82
9			
8		632	
7			

2 Round these decimal numbers to the nearest whole number.

Decimal Number	Rounded to the nearest whole number
6.8	
8.3	
9.6	
17.1	
19.5	
99.6	
100.3	

3 Circle the prime numbers.

4 5 8 11 17 18 23

4 Write the correct amount in the table.

kg	g
0.86kg	
	548g
1.328kg	
	1070g
5.8kg	
	5080g
4.008kg	
	7g

5

a) From north, David turns 90° anti-clockwise.

What direction is he facing now?

b) From north, Michael turns 270° clockwise.

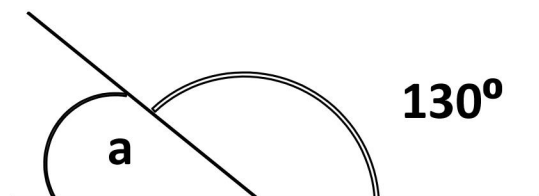
What direction is he facing now?

6 Take 5 hundredths from 7.4

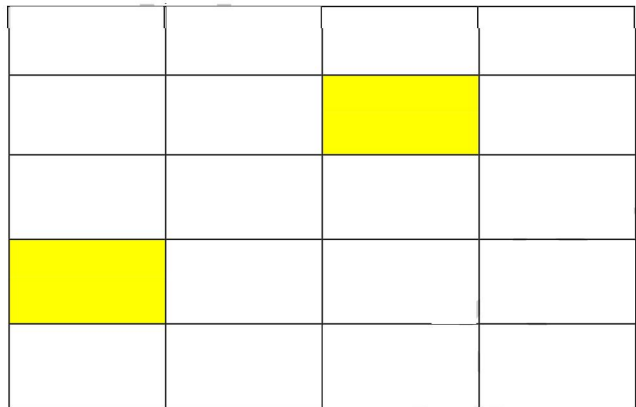

7 In a shop there are 8 jars of sweets. Each jar contains 256 sweets.
How many are there in total?

sweets

8 Look at the two angles on a straight line.
Calculate angle a.



9 What % is shaded?



10 David's average golf score for 4 rounds of golf is 78. Here are his scores. Fill in the missing number on the score card.



72	79	78	
----	----	----	--