
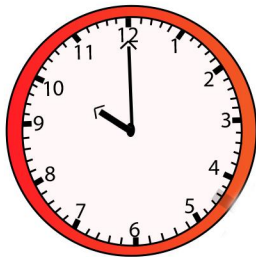


1 How many oranges?

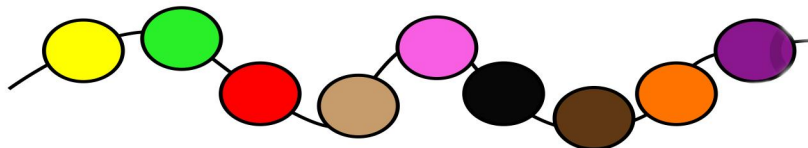


2 What time is it?



o'clock

3 The yellow bead is the 1st on the string.

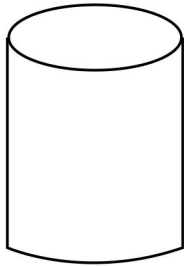


The red bead is the  on the string.

**4** Tick the boxes to total 9p

1p	5p	2p	2p	10p
<input type="checkbox"/>	<input type="checkbox"/>	<input type="checkbox"/>	<input type="checkbox"/>	<input type="checkbox"/>

**5** This shape is a







cylinder


triangle

cube


**6** One less than



One more than



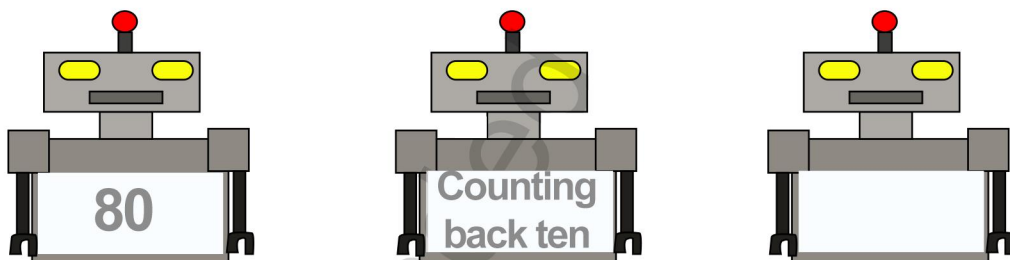
**7** How many groups of 3 in 6?



**8** Draw more coins to make 19 pence



**9**



**10** Draw  $\frac{1}{4}$  past 9.

